

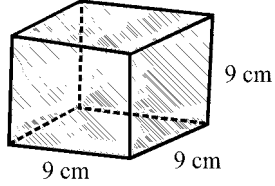
Time: 10 Minutes	Paper Math 6 (T-1)	Total Marks: 10
4th Month, 3rd Week, 1st Day	Exercise 8.3 Q # 1	

☆ Answer the following questions: درج ذیل سوالات کے جواب دیں۔

Q.1. Find the volume and surface are of the given figures. (2x5=10)

دی گئی اشکال کا حجم اور سطح کارقبہ معلوم کریں۔

(i)

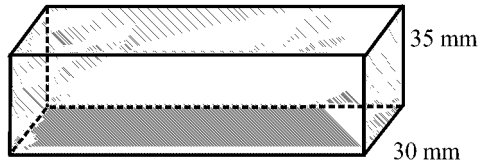


9 cm

9 cm

9 cm

(ii)



49 mm

35 mm

30 mm

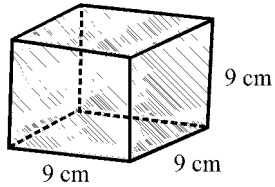
Time: 10 Minutes	Paper Math 6 (T-1)	Total Marks: 10
4th Month, 3rd Week, 1st Day	Exercise 8.3 Q # 1	

☆ Answer the following questions: درج ذیل سوالات کے جواب دیں۔

Q.1. Find the volume and surface are of the given figures. (2x5=10)

دی گئی اشکال کا حجم اور سطح کارقبہ معلوم کریں۔

(i)

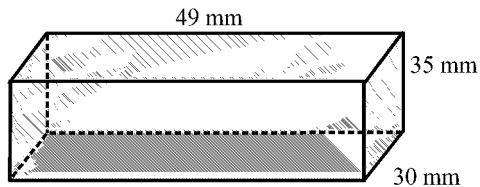


9 cm

9 cm

9 cm

(ii)



49 mm

35 mm

30 mm

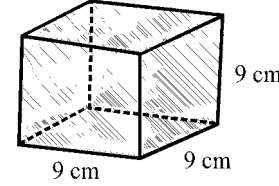
Time: 10 Minutes	Paper Math 6 (T-1)	Total Marks: 10
4th Month, 3rd Week, 1st Day	Exercise 8.3 Q # 1	

☆ Answer the following questions: درج ذیل سوالات کے جواب دیں۔

Q.1. Find the volume and surface are of the given figures. (2x5=10)

دی گئی اشکال کا حجم اور سطح کارقبہ معلوم کریں۔

(i)

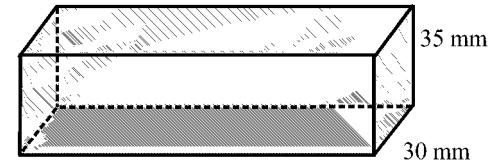


9 cm

9 cm

9 cm

(ii)



49 mm

35 mm

30 mm

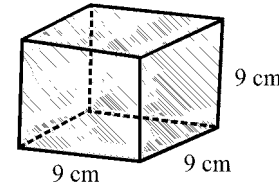
Time: 10 Minutes	Paper Math 6 (T-1)	Total Marks: 10
4th Month, 3rd Week, 1st Day	Exercise 8.3 Q # 1	

☆ Answer the following questions: درج ذیل سوالات کے جواب دیں۔

Q.1. Find the volume and surface are of the given figures. (2x5=10)

دی گئی اشکال کا حجم اور سطح کارقبہ معلوم کریں۔

(i)

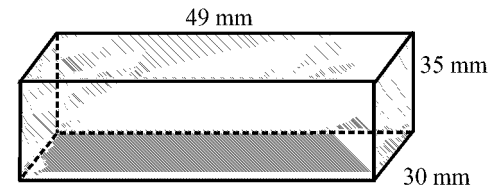


9 cm

9 cm

9 cm

(ii)



49 mm

35 mm

30 mm